



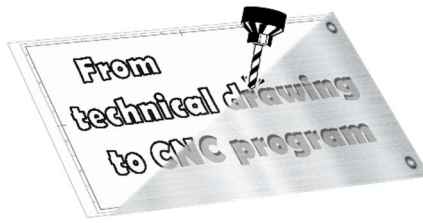
Name of unit:
Producing a sprocket

Field of education:
Mechanical engineering

Professional qualification:
CNC operator

Exercise:
Technical drawing of a sprocket

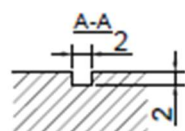
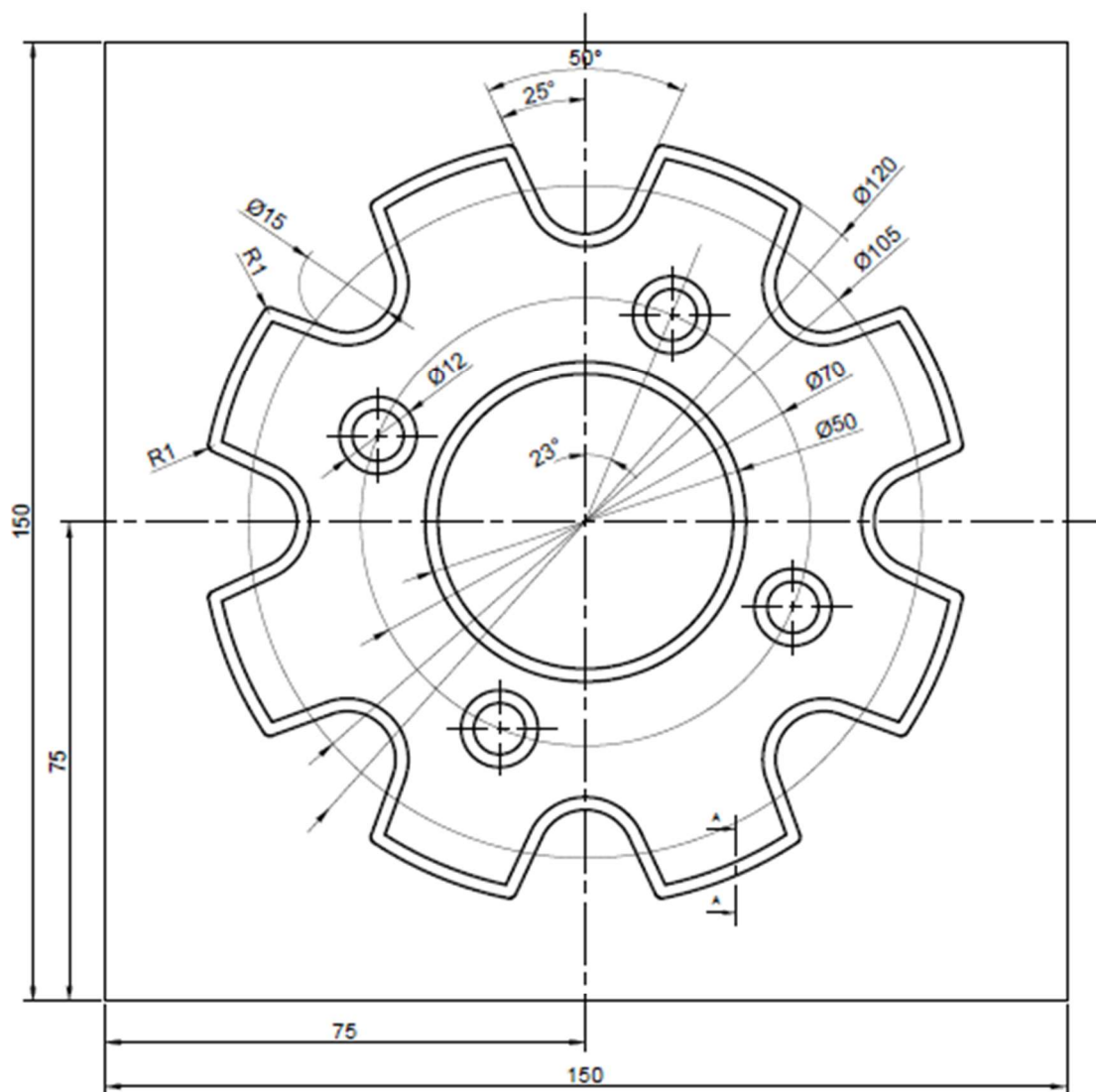
Variant:
Sprocket 3



Instructions for exercise:

According to the workshop drawing try to do the following:

- Draw the 3D model of a finished part in Autodesk Fusion 360 software.
- Set the coordinate system and raw material.
- Choose all needed operations.
- Adjust the tool.
- Check through the simulation if everything works fine.
- Export the G-code for the drawn part.



Measure: M 1:1	Date:	Surname and name:	Strukovna škola ĐURĐEVAC
Position -	Assembly drawing (number): -		Material : -
Number of drawings: -	Name: Sprocket 3		